

Worksheet - 4  
Winter VacationQ1. Choose the correct sign  $\boxed{+}$  or  $\boxed{-}$ 

(i)  $64 \boxed{\phantom{+}} 10 = 74$

(ii)  $50 \boxed{\phantom{+}} 25 = 75$

(iii)  $32 \boxed{\phantom{+}} 12 = 44$

(iv)  $72 \boxed{\phantom{+}} 70 = 2$

Q2. Fill in the blanks

(i)  $18 + \boxed{\phantom{00}} = 26$

(ii)  $42 - \boxed{\phantom{00}} = 21$

(iii)  $\boxed{\phantom{00}} - \boxed{30} = 30$

(iv)  $\boxed{\phantom{00}} + 22 = 66$



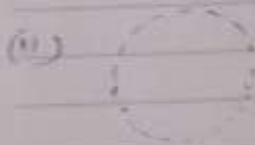

Q3. Colour the correct sums with  
colours

Q6 Complete the fact

(1)  $19 + 4 = 23$   $23 - 19 = 4$

(1)  $50 + \quad = 60$   $20 + 50 =$    $60 - 10 =$

Q7. Join the dots and identify the given shapes and write name. Write - draw



NOTES

Class \_\_\_\_\_

Subject \_\_\_\_\_

2022:12:23 11:10

(i)  $20 + 5 = 25$

(ii)  $42 + 21 = 63$

(iii)  $32 + 17 = 49$

(iv)  $53 + 33 = 86$

Q4. Write these sums which equal to same amount

(i)  $\square + \square = 20$        $\square + \square = 20$

$\square + \square = 20$

(ii)  $\square + \square = 75$        $\square + \square = 75$

$\square + \square = 75$

Q5. Regroup and solve.

(i) 
$$\begin{array}{r} \bigcirc \quad \bigcirc \\ 6 \quad 5 \\ - 3 \quad 8 \\ \hline \end{array}$$

(ii) 
$$\begin{array}{r} \bigcirc \\ 5 \quad 8 \\ + 3 \quad 9 \\ \hline \end{array}$$

(iii) 
$$\begin{array}{r} \bigcirc \quad \bigcirc \\ 7 \quad 5 \\ - 3 \quad 9 \\ \hline \end{array}$$

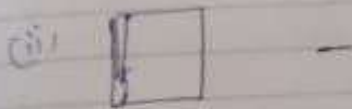
(iv) 
$$\begin{array}{r} \bigcirc \\ 8 \quad 2 \\ + 1 \quad 9 \\ \hline \end{array}$$

## Worksheet Winter Vacation

Q1. Who am I

- (i) I paint the house -
- (ii) I stitch your clothes -
- (iii) I make wooden furniture -

Q2. Who use these things.



Q3. Fill in the <sup>blanks</sup> ~~boxes~~ with correct letter.


(i) Harvesting festival of Assam


(ii) Muslims offer prayers at the

(iii) In Church Christians sing



Q4. Write three <sup>example</sup> name of each transport.

(i) Air transport 

(ii) Water transport 

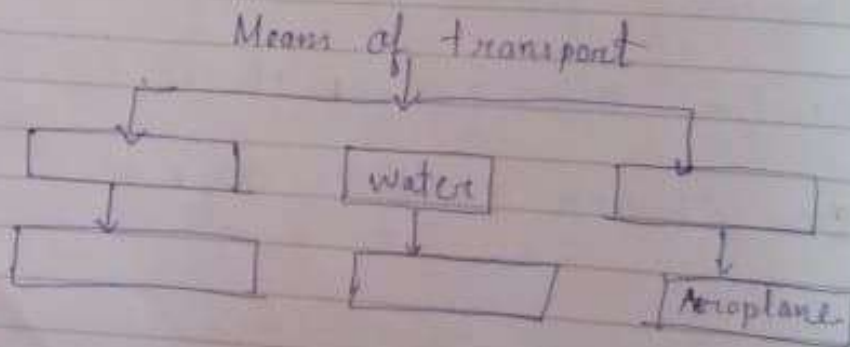
Q5. Write the name of the colours

(i) \_\_\_\_\_ O \_\_\_\_\_ E \_\_\_\_\_

(ii) \_\_\_\_\_ L O \_\_\_\_\_

(iii) \_\_\_\_\_ U \_\_\_\_\_

Q6. Complete the flow chart



SUB - HINDI

प्रश्न ① एक समान लय वाले शब्द ढाँटकर लिखिए।

भाग, अब, रूप, शूब, सूप, नाम

(1) रूप \_\_\_\_\_

(2) शूब \_\_\_\_\_

(3) नाम \_\_\_\_\_

प्रश्न ② शब्दार्थ लिखिए।

(1) पैड़ - \_\_\_\_\_

(2) ढटकर - \_\_\_\_\_

(3) मुँह - \_\_\_\_\_

(4) आनंद - \_\_\_\_\_

(5) आग - \_\_\_\_\_



## प्रश्न - उत्तर

प्रश्न① बंदर ने खेत में जाकर क्या किया?

उत्तर

प्रश्न② बंदर ने भाग क्यों जलाई ?

उत्तर

प्रश्न③ बंदर ने साम कैसे खाया ?

उत्तर

प्रश्न④ बंदर ने सोने के लिए क्या-क्या इंतजाम किया था ?

उत्तर

प्रश्न⑤ समाश्रित और लिखित।

(1) चट्टर - भट्टर - चट्टर-भट्टर

(2) खदर - बंदर - \_\_\_\_\_

(3) चुदर - भुदर - \_\_\_\_\_